

**D - 66**

**CONTINUOUS & COMPREHENSIVE EVALUATION  
SUMMATIVE ASSESSMENT - I - NOVEMBER 2022**

**SOCIAL STUDIES  
(English Version)  
PART - A & B**

**VII Class]**

**(Max. Marks: 80)**

**[Time: 2.45 Hrs.]**

**Marks: 70]**

**Part - A**

**[Time: 2.15 Hrs.]**

**General Instructions:**

- i) In the time duration of 2 hrs 45 min, first 15 minutes of time is exclusively allotted to read and understand the question paper.*
- ii) All the questions are compulsory.*
- iii) This question paper comprises of four sections-I,II,III & IV.*
- iv) Attach Part-B to the main answer sheet.*

**\* \* \***


**Section - I**

**Instructions:**

- i) Answer all the questions.*
- ii) Each question carries 2 marks.*
- iii) Answer the questions in not exceeding 1 or 2 sentences.      7x2=14*

1. Name any two relief features of an ocean ?
2. Why is Italy a Peninsula ?
3. How did the invention of steam engine helped shipping industry ?
4. Which symbol is used to mark a place and railway track on a map?
5. What is meant by a tributary ?

*Observe the given pie graph and answer the questions 6 & 7.  
Distribution of Fresh surface water %*



- Lakes 87%
- Swamps 11%
- Rivers 2%

6. Where do you find more fresh water on the surface of the earth ?
7. Write any two uses of river water ?

**[Turn Over**

**Instructions:**

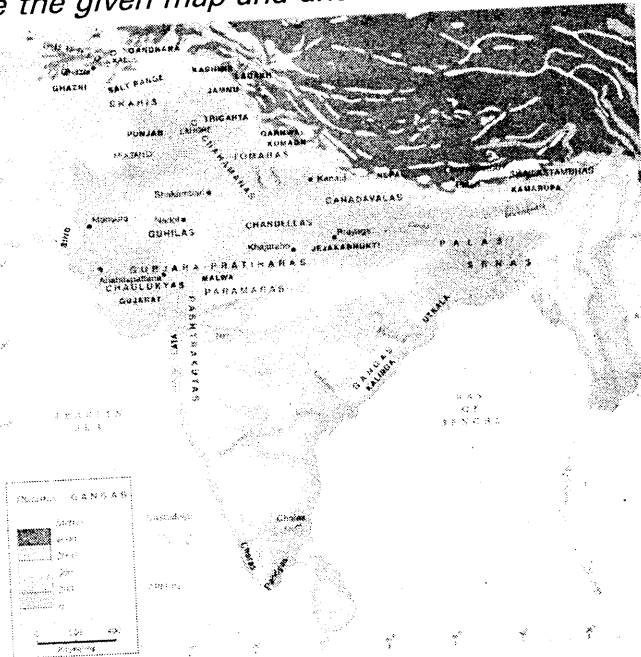
i) Answer all the questions.

ii) Each question carries 4 marks.

iii) Answer each question in 4 to 5 sentences.

6x4=24

8. What are the problems faced by the people due to urbanisation at present ?
9. How do the present cooperative societies help fishermen ?
10. Prepare a pamphlet on the importance of ground water ?
11. Write a letter to the concerned authority suggesting measures to prevent child labour ?
12. What are the uses of maps showing heights ?
13. Observe the given map and answer (i) & (ii) questions.



Map: Major Dynasties of Northern, Central and Eastern India, c.700-1100 CE

**Questions:**

- i) Name the kingdom that is on the banks of the river Mahanadi ?
- ii) Who ruled the present Maharashtra region ?

[Contd..on 3rd page

## Section - III

**Instructions:**

i) Answer all the questions.

ii) Each question carries 8 marks.

iii) There is internal choice in Section-III. Choose any one question and answer.

iv) Answer each question in 8 to 10 sentences. 4x8=32

14. a) How many seasons are there in Europe ? Explain any two ?

(OR)

b) What are the problems faced by the weavers ?

15. a) Read the following paragraph and write your opinion on it.

Earlier, there were dense forests on the Himalayas from where Ganga and its tributaries originate. In the recent years, there has been a large scale felling of trees and hence, the forest cover in the Himalayas has reduced considerably.

(OR)

b) Today's generation has received water from the past as a sacred asset. We should pass it. On to the future generation just as we received it. We should also develop ways of using and conserving water in a restrained manner.

16. a) Locate the following given below on the outline map of Africa.

1) Kalahari desert 2) Madagascar 3) Nigeria

4) The river that crosses sahara desert

(OR)

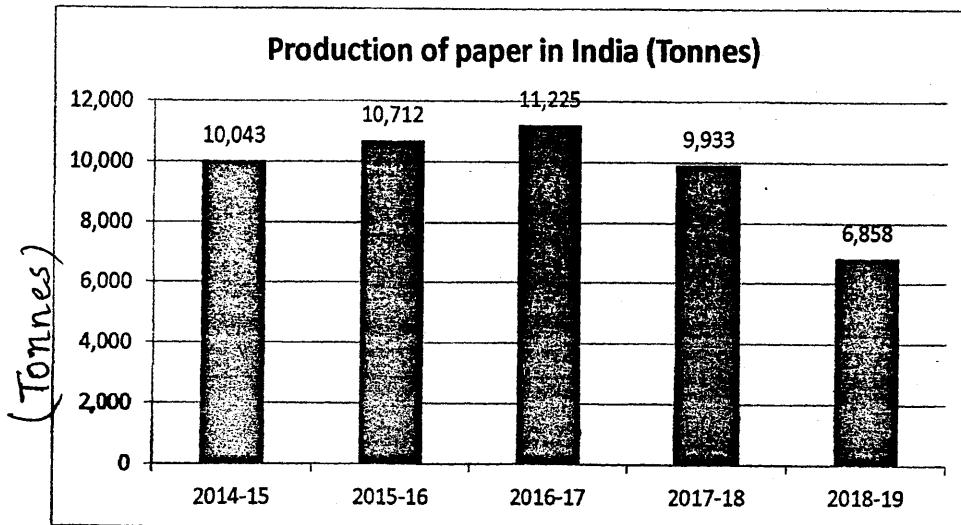
b) Locate the following given below on the outline map of Telangana.

1) Karimnagar 2) Nalgonda 3) Mahabubnagar

4) The State on the Northern side of Telangana

[Turn Over

17. a) Observe the following bar graph and analyse it.



(OR)

b) Observe the given table and analyse it.

Table: Different vehicles used to commute (percentage %)

Year	Two wheeler	Cars/ Taxis	Buses	Goods vehicles	Other Vehicles
1991	64%	15%	01%	10%	01%
2001	67%	18%	01%	0.8%	02%
2011	69%	14%	01%	0.6%	03%
2016	73.5%	13%	0.8%	4.6%	4.6%

\* \* \* \* \*

**D - 66 A**

**CONTINUOUS & COMPREHENSIVE EVALUATION  
SUMMATIVE ASSESSMENT - I - NOVEMBER 2022  
SOCIAL STUDIES  
(English Version)  
PART - B**

VII Class]

(Max.Marks:10)

[Time: ½ Hr.

Student Name ..... Roll No. ....

**Instructions:**

- i) Attach Part-B question paper to the main answer book of Part-A.*
- ii) Each question carries 1 mark.*
- iii) Answer all the questions.*
- iv) Answers are to be written in the question paper only.*

\* \* \*

*Write the Capital Letter showing the correct answer for the following questions in the brackets provided against each question.*

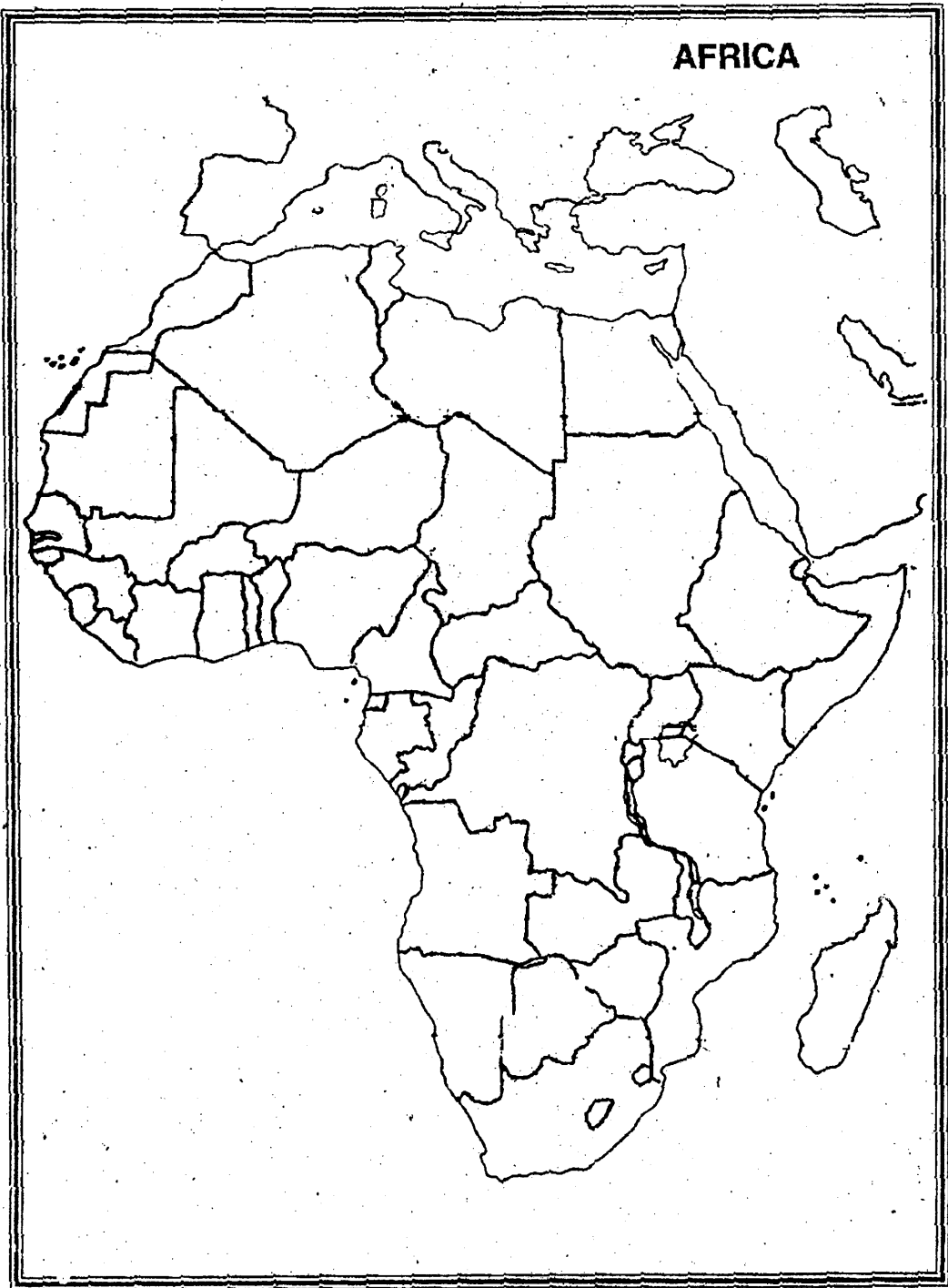
*10x1=10*

1. Rainfall is a form of [     ]  
A) Evaporation     B) Transpiration  
C) Precipitation     D) Erosion
2. The river that forms delta is [     ]  
A) Dindi     B) Musi  
C) Manjeera     D) Krishna
3. The thickness of the aquifer determines the availability of [     ]  
A) Surface water  
B) The availability of ground water  
C) Presence of minerals  
D) Implementation of water shed programmes

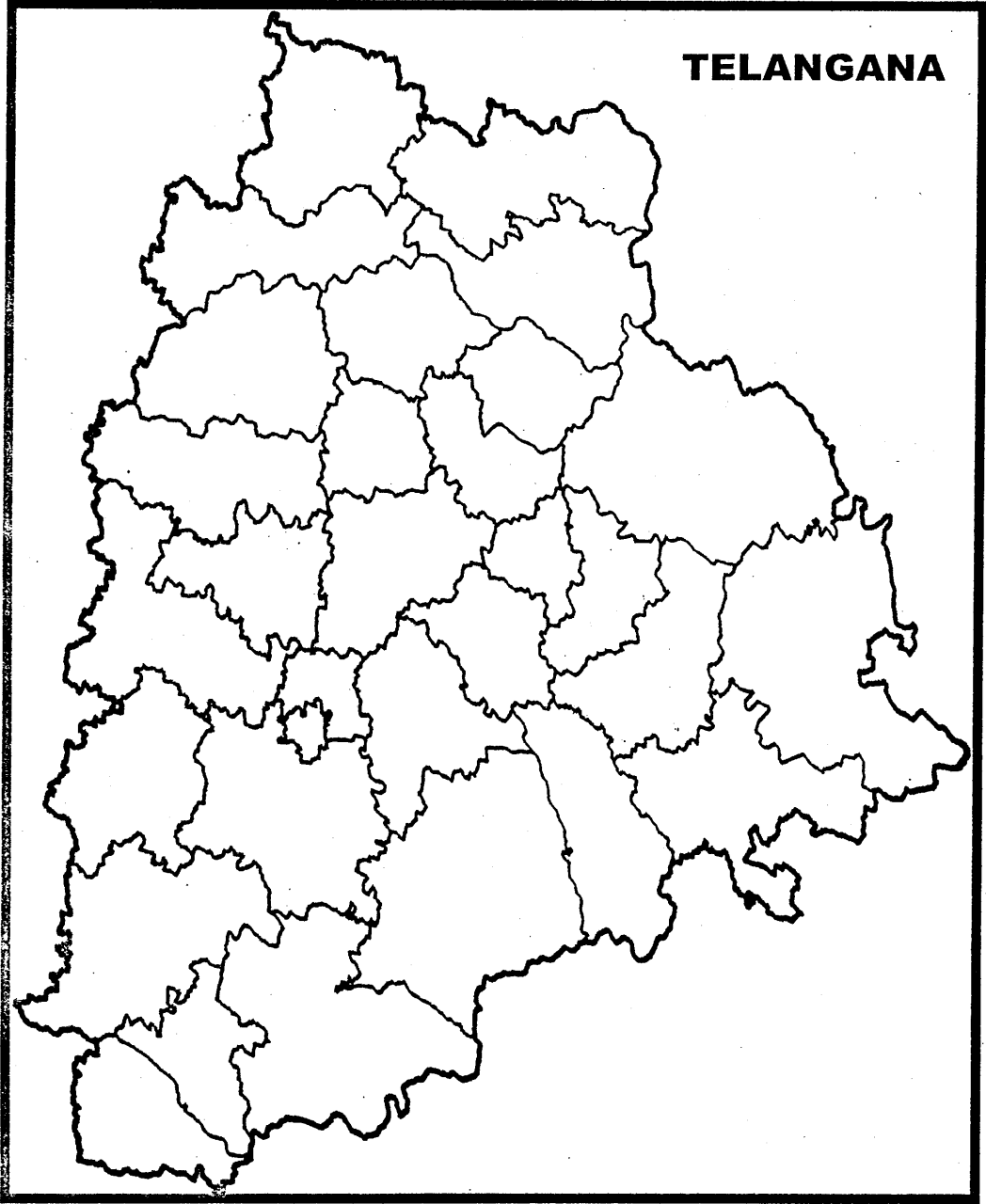
*[Turn Over*

4. This is not a cause of ocean currents [     ]  
A) Rotation of the earth  
B) Prevailing winds  
C) Difference in temperature  
D) Salinity of the ocean water
5. This is an example of a gulf [     ]  
A) Arabian sea     B) Bay of Bengal  
C) Baltic sea     D) Mediterranean sea.
6. Human beings first evolved in [     ]  
A) Asia     B) Australia  
C) Europe     D) Africa
7. The first handloom cloth patented in India is [     ]  
A) Kalamkari sarees  
B) Pochampally sarees  
C) Patan Patola sarees  
D) Kanjeevaram sarees
8. The fastest means of transportation is [     ]  
A) Road transport     B) Rail transport  
C) Water transport     D) Air transport
9. Subabul wood is widely used in the production of [     ]  
A) Paper     B) Caustic soda  
C) Common salt     D) Cotton
10. Chahamanas ruled over [     ]  
A) Madras and Uraiyur     B) Kalinga  
C) Delhi and Ajmer     D) Hyderabad

*[Contd..on 3rd page]*



*[Turn Over*



\* \* \* \* \*