

D - 45

CONTINUOUS & COMPREHENSIVE EVALUATION  
SUMMATIVE ASSESSMENT - I - DECEMBER 2021

SOCIAL STUDIES  
(English Version)

PART - A & B

VI Class]

(Max. Marks: 80)

[Time: 2.45 Hrs.

Marks: 80

Part - A

[Time: 2.15 Hrs.

General Instructions:

- i) In the time duration of 2 hrs 45-min, first 15 minutes of time is exclusively allotted to read and understand the question paper.
- ii) All the questions are compulsory.
- iii) This question paper comprises of four sections-I,II,III & IV.
- iv) Attach Part-B to the main answer sheet.

\* \* \*

Section - I

Instructions.

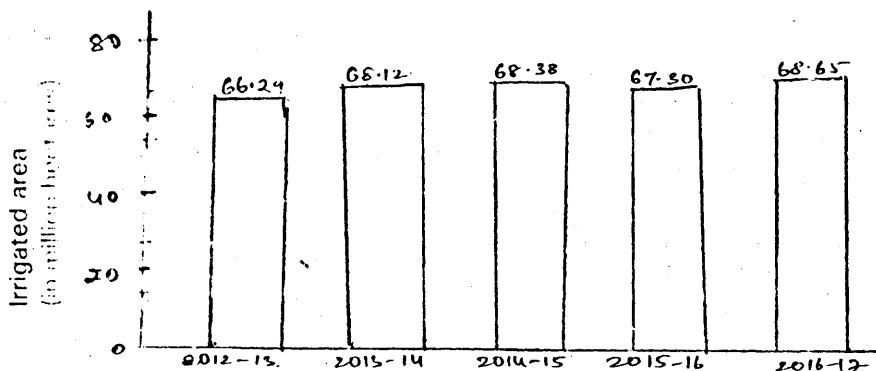
7x2=14

- i) Answer all the questions.
- ii) Each question carries 2 marks.
- iii) Answer the questions in not exceeding 1 or 2 sentences.

1. What is a globe ?
2. Why are conventional symbols used on a map ?
3. How is a delta formed ?
4. Mention any two functions of the Gondpanch ?
5. Who are called Nomads ?

Observe the given graph and answer the questions 6 & 7.

Graph: Net irrigated Area (Million hectares)



[Turn Over

D - 45

2

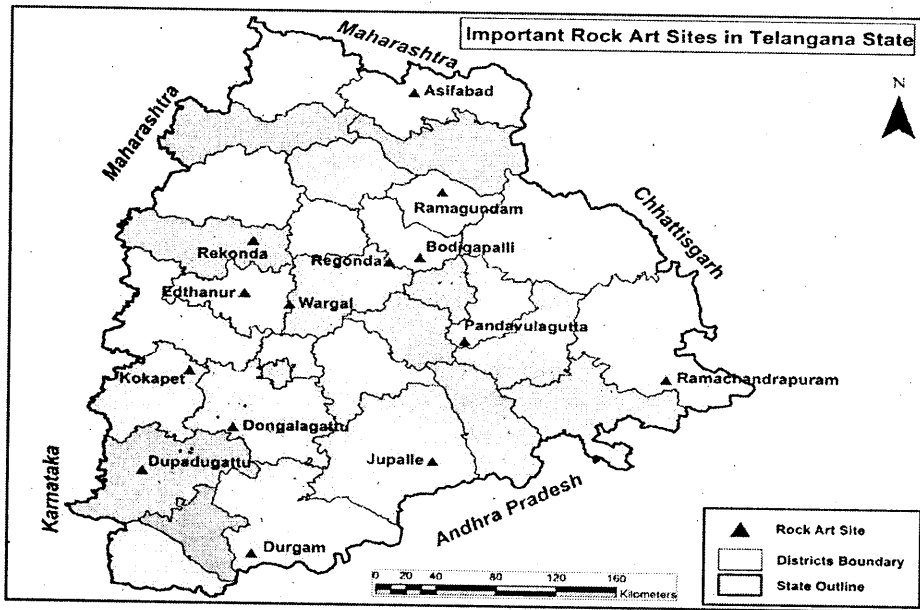
6. In which year, the net irrigated area is less ?
7. Name any two sources of irrigation ?

*Section - II*

*Instructions:*

6x4=24

- i) Answer all the questions.
  - ii) Each question carries 4 marks.
  - iii) Answer each question in 4 to 5 sentences.
8. Suggest measures to conserve soil ?
  9. What are the problems faced by the farmers at present ?
  10. Prepare a pamphlet to conserve forests ?
  11. Write a letter to the concerned authority highlighting the need to create awareness regarding the use of organic fertilizers ?
  12. Observe the given map and answer the questions 12 (a) & (b)



*Questions:*

- a) Name the Southernmost Rock Art site in Telangana State ?
  - b) Why rock art sites are important ?
13. What are the common characteristics of a tribe ?

*[Contd..on 3rd page*

## Section - III

**Instructions:**

4x8=32

*i) Answer all the questions.**ii) Each question carries 8 marks.**iii) There is internal choice for every question. Only one option should be answered.**iv) Answer each question in 8 to 10 sentences.*

14. a) What are the major landforms of India ? Explain any two ?

*(OR)*

b) Explain the settled life of Early people ?

15. a) *Read the given text and write your opinion.*

Environmentalists believe that we need to plan the use of our lands in such a way that they remain productive for generations to come. For this, we need to practice suitable land use. This requires that the soil fertility be maintained and the ground water remains recharged. There should be proper balance between forests, pastures and agricultural lands and so on.

*(OR)*

b) The ground water table is very low in the plateau region but now everyone wants so rely on bore wells. Even though only a few bore wells can be successful, there is stiff competitions for water. Over the years, with everyone digging for water, the depth of bore wells has increased.

16. a) Locate the following on the World map.

1) Pacific ocean

2) Africa

3) North America

4) Longest latitude

*(OR)*

b) Locate the following on the outline map of India.

1) Western Ghats

2) Indo-gangetic plains

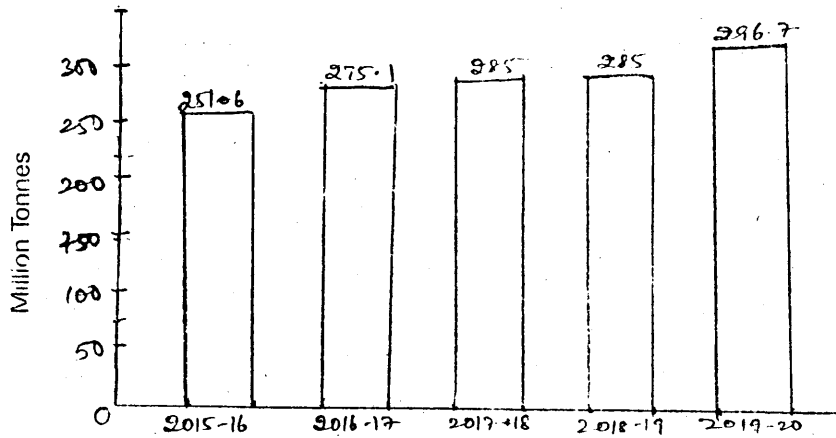
3) Deccan plateau

4) The sea into which river Godavari joins

*[Turn Over*

17. a) Observe the given graph and analyse.

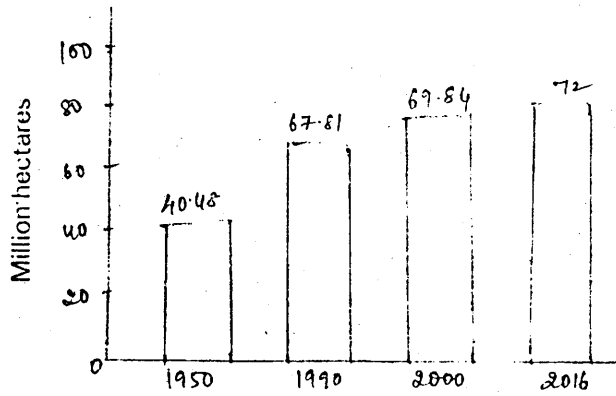
Graph: Food grain-production in India (million Tonnes)



(OR)

b) Observe the given graph and analyse.

Graph: Land under forests (million hectares)



\* \* \* \* \*

**D - 45 A**

**CONTINUOUS & COMPREHENSIVE EVALUATION  
SUMMATIVE ASSESSMENT - I - DECEMBER 2021  
SOCIAL STUDIES  
(English Version)  
PART - B**

VI Class]

(Max.Marks:10)

[ Time: ½ Hr.

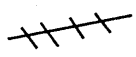

Student Name ..... Roll No. ....

**Instructions:**

- i) Attach Part-B question paper to the main answer book of Part-A.
- ii) Each question carries 1 mark.
- iii) Answer all the questions.
- iv) Answers are to be written in the question paper only.

\* \* \*

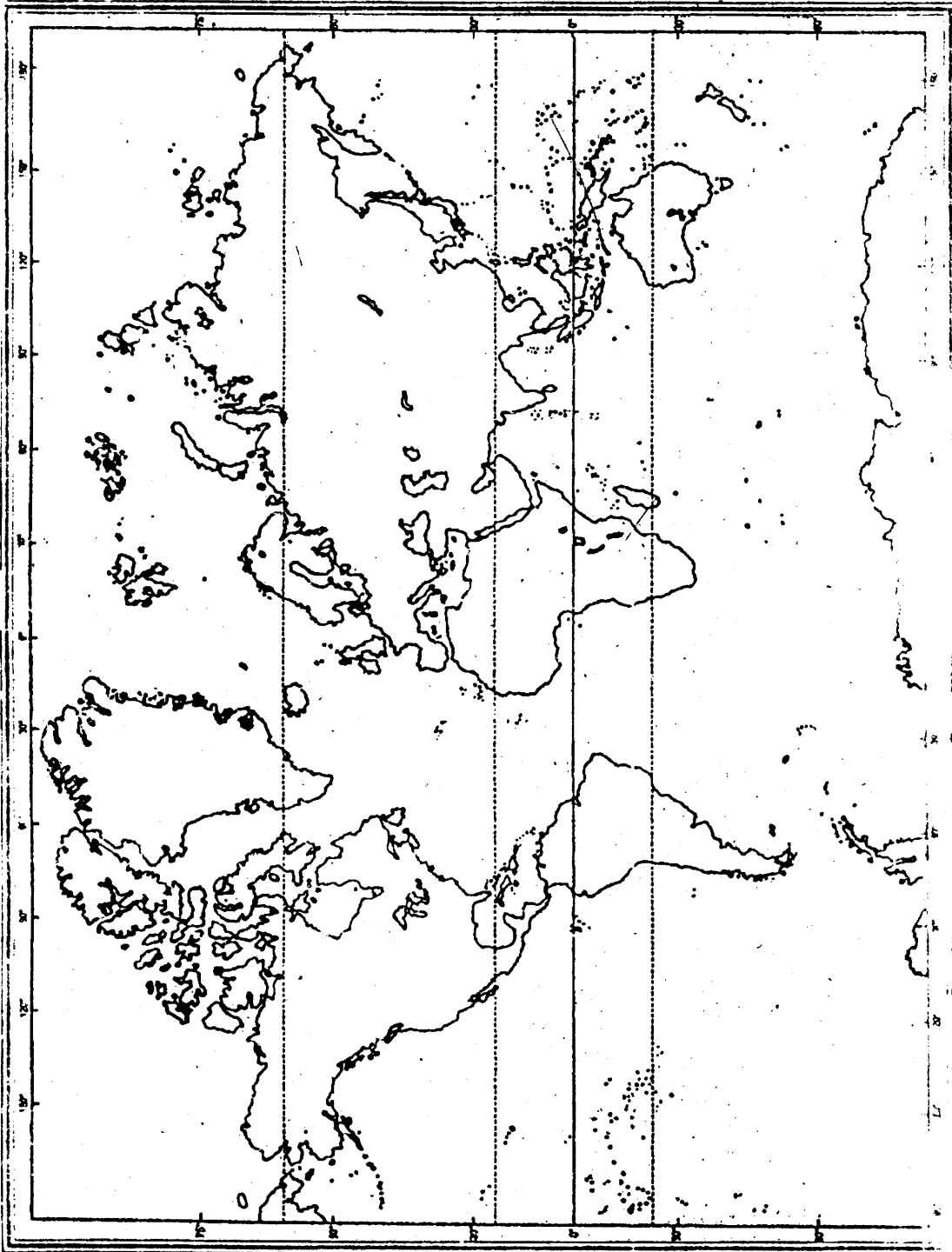
Write the Capital Letter showing the correct answer for the following questions in the brackets provided against each question. **10x1=10**

1. If you are facing south, all the things to your left are towards [     ]  
A) East                      B) West  
C) North                     D) South
  
2. The conventional symbol for Kutcha Road is [     ]  
A) KR                        B) =  
C)                       D) 
  
3. Earth looks in this colour [     ]  
A) Blue                      B) Green  
C) Yellow                    D) Red

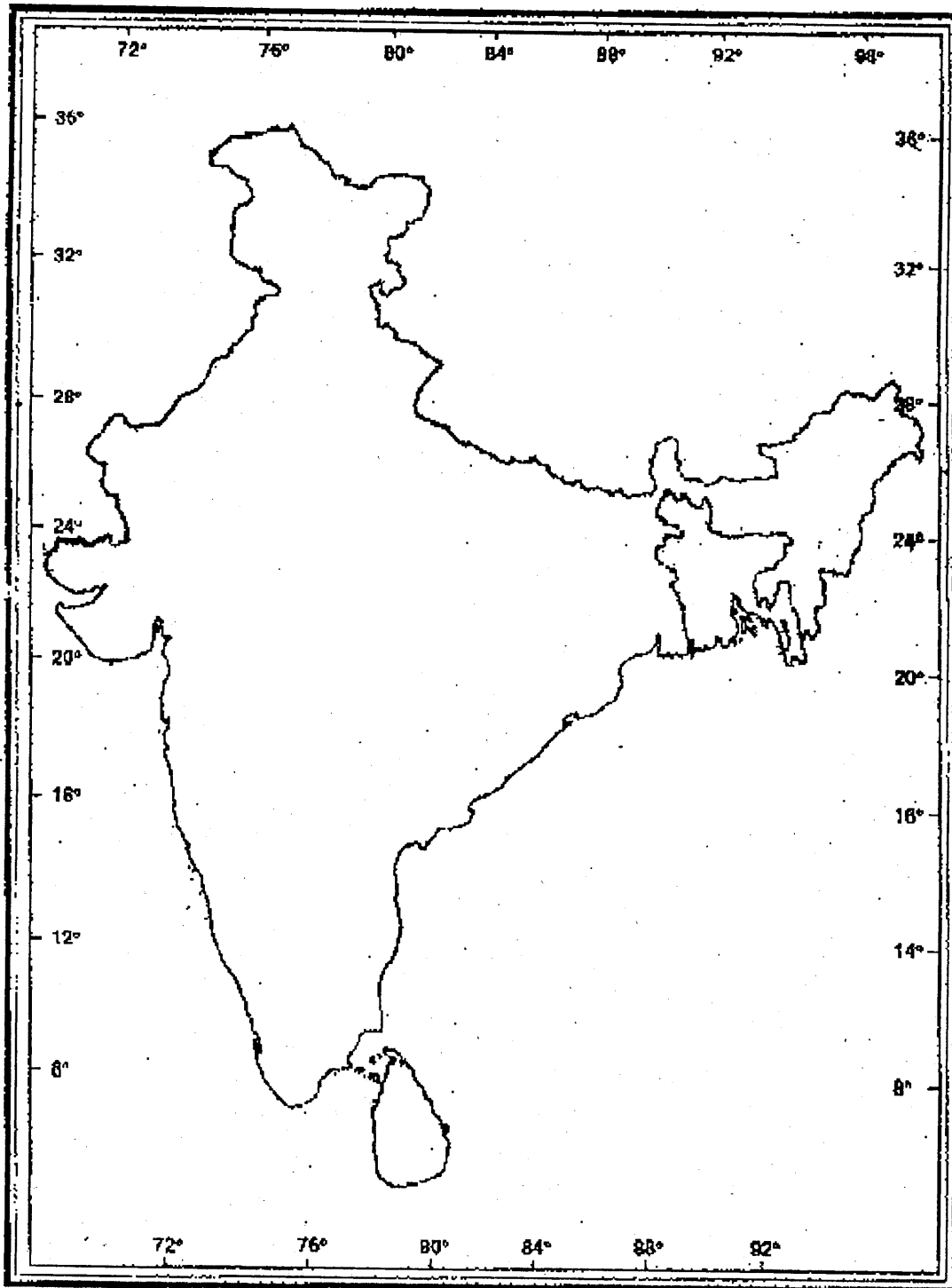
*[Turn Over*

4. The 0° longitude is called as the  
A) International date line B) North Pole  
C) Greenwich line D) South Pole
5. The state on the Eastern coastal plain is  
A) Goa B) Andhra Pradesh  
C) Karnataka D) Kerala
6. A drought situation develops when there is  
A) Low Rainfall B) High Rainfall  
C) Earthquake D) Volcanic Eruption
7. This is not a forest product  
A) Honey B) Bamboo  
C) Turmeric D) Tubers
8. This discovery by the early people brought great changes in their lives  
A) Stone B) Fire  
C) Fossils D) Forests
9. Gonds, a tribe mostly lives in the district of  
A) Sangareddy B) Mahabubnagar  
C) Hyderabad D) Adilabad
10. Podu is a practice of  
A) Fishing B) Farming  
C) Mining D) Weaving

*[Contd. on 3rd page*



[Turn



\* \* \* \*